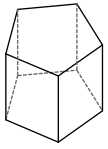


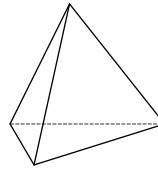
Identifying Solid Figures

Name each figure.

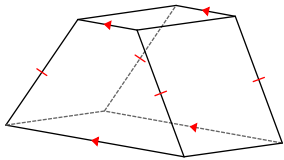
1)



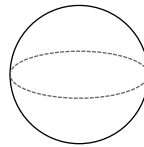
2)



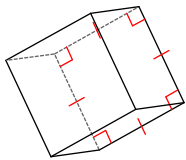
3)



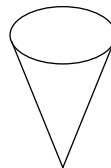
4)



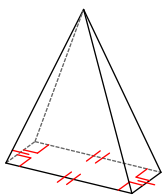
5)



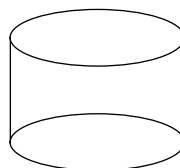
6)



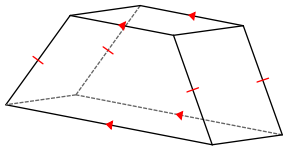
7)



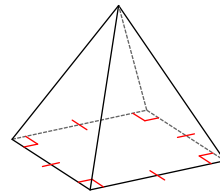
8)



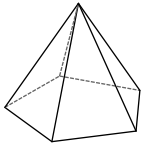
9)



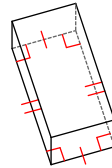
10)



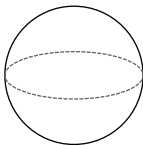
11)



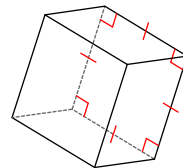
12)



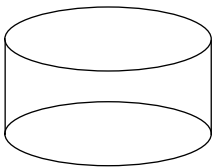
13)



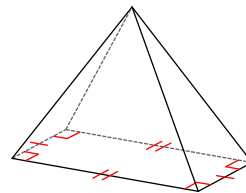
14)



15)



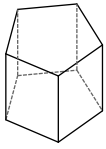
16)



Identifying Solid Figures

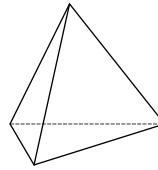
Name each figure.

1)



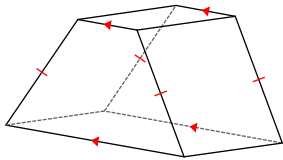
pentagonal prism

2)



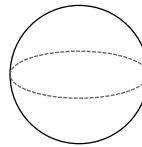
triangular pyramid

3)



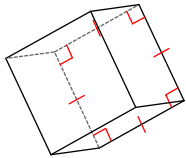
trapezoidal prism

4)



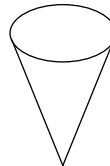
sphere

5)



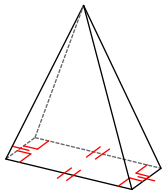
square prism

6)



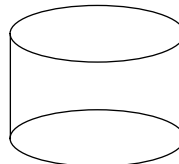
cone

7)



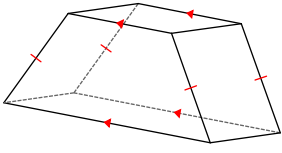
rectangular pyramid

8)



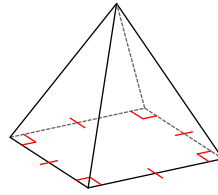
cylinder

9)



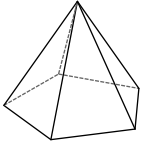
trapezoidal prism

10)



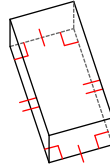
square pyramid

11)



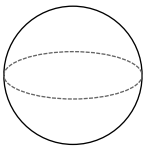
pentagonal pyramid

12)



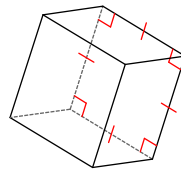
rectangular prism

13)



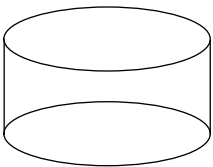
sphere

14)



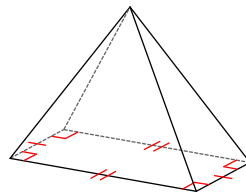
square prism

15)



cylinder

16)



rectangular pyramid